


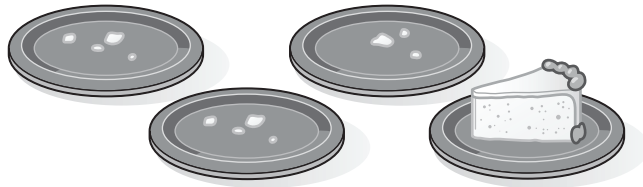
Name _____




$$\begin{array}{r} \underline{\hspace{1cm}} \\ 3 - 1 = \text{-----} \\ \underline{\hspace{1cm}} \end{array}$$



$$\begin{array}{r} \underline{\hspace{1cm}} \\ 5 - 4 = \text{-----} \\ \underline{\hspace{1cm}} \end{array}$$




$$\begin{array}{r} \underline{\hspace{1cm}} \\ \text{-----} = 4 - 3 \\ \underline{\hspace{1cm}} \end{array}$$




$$\begin{array}{r} \underline{\hspace{1cm}} \\ \text{-----} = 5 - 2 \\ \underline{\hspace{1cm}} \end{array}$$

Have children compare each number sentence to the subtraction picture. Then have children complete the number sentence.

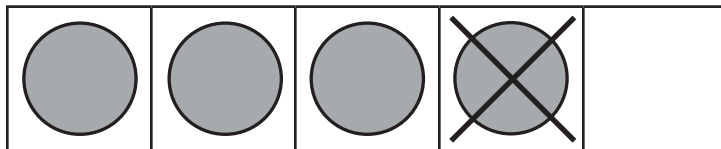
Name _____



$$3 - 2 = \underline{\hspace{1cm}}$$



$$5 - 1 = \underline{\hspace{1cm}}$$



$$\underline{\hspace{1cm}} - 1 = 4$$

Have children compare each number sentence. Then have children complete the number sentence.