



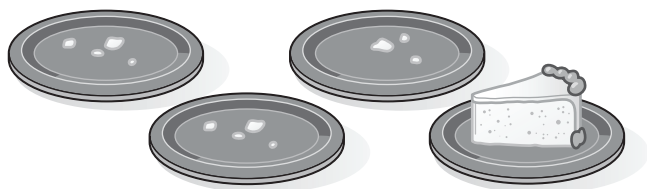
Name _____




$$3 - 1 = \underline{2}$$



$$5 - 4 = \underline{1}$$




$$\underline{1} = 4 - 3$$



$$\underline{3} = 5 - 2$$

Have children compare each number sentence to the subtraction picture. Then have children complete the number sentence.

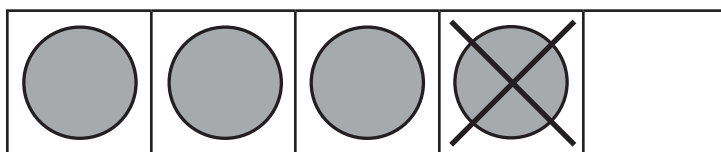
Name _____



$$3 - 2 = \underline{\quad 1 \quad}$$



$$5 - 1 = \underline{\quad 4 \quad}$$



$$\underline{\quad 3 \quad} = 4 - 1$$

Have children compare each number sentence. Then have children complete the number sentence.

