



Ready® Mathematics**Lesson 10 Quiz****Solve the problems.**

- 1** Hannah is working with blocks to show numbers. What does this set of blocks show?



Circle all the correct answers.

- A** 20 hundreds + 3 tens + 0 ones
B 0 hundreds + 23 tens + 0 ones
C 2 hundreds + 3 tens + 0 ones
D 1 hundred + 13 tens + 0 ones
E 1 hundred + 10 tens + 3 ones
F 0 hundreds + 0 tens + 230 ones
- 2** Diego makes a model to show the value of a number. What is this same value in tens and in ones?



Fill in the blanks to answer.

The model shows _____ hundreds. This is the same value
as _____ tens or _____ ones.

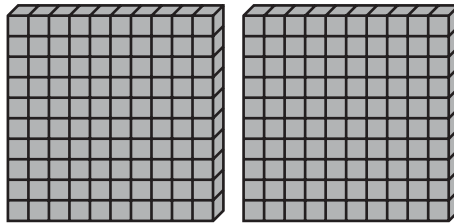
Lesson 10 Quiz continued

- 3** A sticker book has 100 stickers. A sticker paper has 10 stickers. Ellen and Nick have 5 sticker books and 4 sticker papers. Ellen says they have 450 stickers. Nick says they have 504 stickers. Who is right and why?

Circle the correct answer.

- A** Ellen is right. When you count by 100 four times and then count by 10 five times, you get 450 stickers.
- B** Nick is right. When you count by 100 five times and then add 4, you get 504 stickers.
- C** Neither is right. When you count by 100 five times and then add 4, you get 54 stickers.
- D** Neither is right. When you count by 100 five times and then count by 10 four times, you get 540 stickers.

- 4** What value does the model show?



Circle *Yes* or *No* to tell if the model shows the value.

- | | | |
|----------------------|-----|----|
| a. 2 ones | Yes | No |
| b. 200 | Yes | No |
| c. 20 | Yes | No |
| d. 2 hundreds | Yes | No |