

Name _____








Solve.

1 $7 + 8 = ?$

7 + _____ = _____

10 + _____ = _____

7 + 8 = _____

2 $5 + 9 = ?$

	5	6	7	8	9	10	11	12	13	14	15	
--	---	---	---	---	---	----	----	----	----	----	----	--

5 + _____ = _____

10 + _____ = _____

5 + 9 = _____

3 $? = 8 + 8$

_____ = **8 + 8**



Name _____

Solve.

4 $7 + 9 = ?$

_____ $= 7 + 9$

- 5** Amy buys 8 red cups and 5 blue cups.
How many cups in all?

$8 + 5 =$ _____

